



NAME \_\_\_\_\_ DATE \_\_\_\_\_








## PLACE VALUES OF THE NUMBERS

Represent the numbers without changing their values.

Example:


























Draw 241. Use hundreds, tens and ones place value disks.

A) Draw

	H	T	O
241 =	 	   	

Use only tens and ones place value disks.

B) Draw

	H	T	O
241 =		                       	

1) Draw 141. Use hundreds, tens and ones place value disks.

A) Draw

	H	T	O
141 =			

Use only tens and ones place value disks.

B) Draw

	H	T	O
141 =			